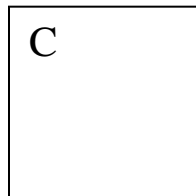




Name\_\_\_\_\_

Use your Cheez-It Crackers to find the **area** of each shape!  
Write the area inside each shape. Show your work!

Area = base x height



Use your Cheez-It Crackers to find the **perimeter** of each shape! Write the perimeter inside each shape. Show your work!

Perimeter = base + base + height + height  
2 base + 2 height

